


SUNSHINE MATH - 1
Venus, IV

Name: _____
(This shows my own thinking.)

- ★★ 1. Superstar, what number is missing on the star so that the sum is 19?



Answer: _____

- ★★ 2. Look at the cats!

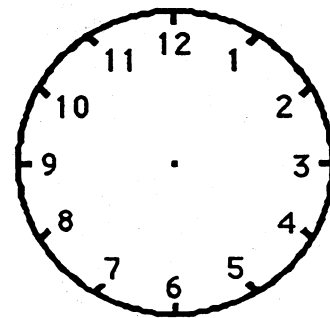
How many tails on all those cats? _____

How many ears on all those cats? _____

How many legs on all those cats? _____



- ★★★ 3. Teaka finishes dinner at 6 o'clock. She reads her book for 2 hours. Then she goes to bed. Draw the hour and minute hands on the clock to show when Teaka goes to bed.




- ★★ 4. The bug below breaks in half every day. Each half becomes a new bug. If 5 bugs break apart, how many bugs will there be the next day? _____



- ★★★ 5. There are 3 children and 1 wagon. Two children can play at a time. One child can ride and one child can pull. In the table, show all the ways the children can ride and pull.



Sam



Kevin

Alice


Child Pulling	Child Riding

- ★★ 6. Herick ran the ball for 5 yards. Then he ran for 3 more yards. Then he lost 2 yards on a run. His jersey number is 13. How far did he run on those three plays?

Answer: _____ yards



- ★ 7. About how many triangles does it take to cover the big shape? Circle the best estimate.



5 triangles? 10 triangles? 20 triangles?